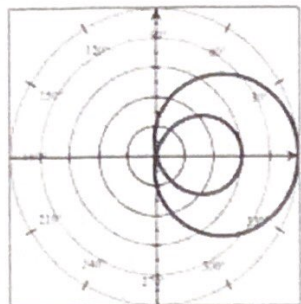
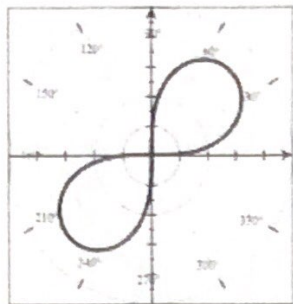


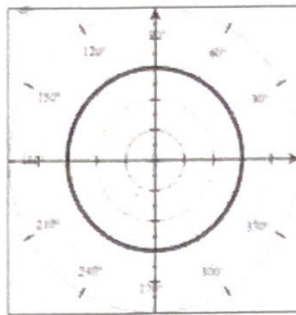
- ___ 1) $r = 2.5 + 2.5\sin\theta$ ___ 2) $r = 3$ ___ 3) $r = 3.5\sin 3\theta$ ___ 4) $r = 4.5\sin 2\theta$
 ___ 5) $r = 4.5\cos 2\theta$ ___ 6) $r = 1.5 + 2\cos\theta$ ___ 7) $r = -3\sin\theta$ ___ 8) $r = 2 - \sin\theta$
 ___ 9) $r^2 = 16\sin 2\theta$ ___ 10) $r = 4\cos 5\theta$ ___ 11) $r = 3.5\cos 3\theta$ ___ 12) $r = 2.5 - 2.5\cos\theta$
 ___ 13) $r = 3\cos\theta$ ___ 14) $r = 1 + 4\cos\theta$ ___ 15) $r = 4.5\sin 6\theta$ ___ 16) $r = .5\theta$



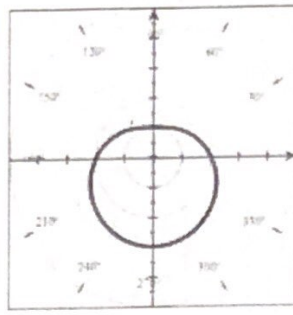
a.



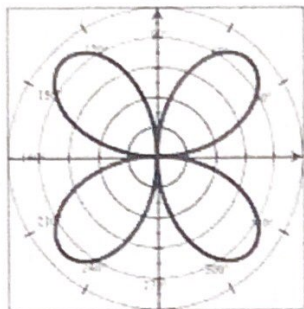
b.



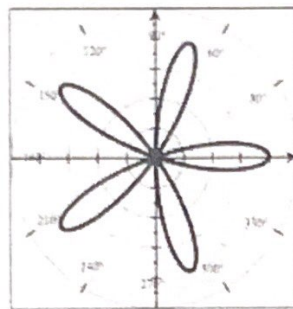
c.



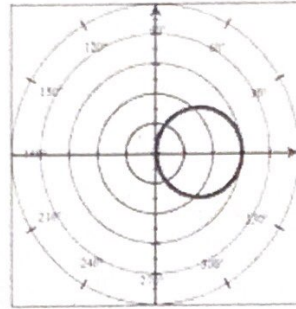
d.



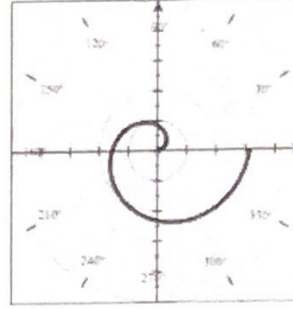
e.



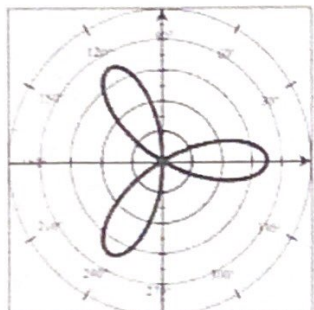
f.



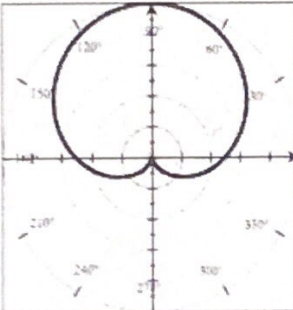
g.



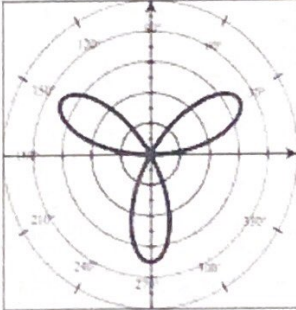
h.



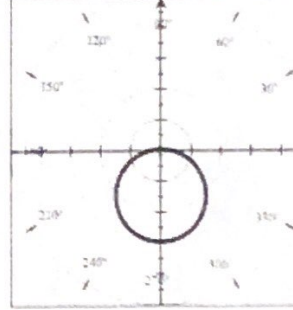
i.



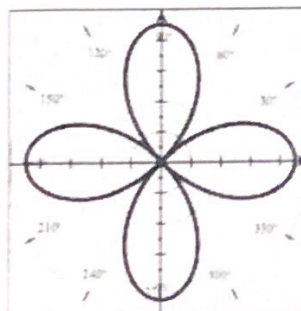
j.



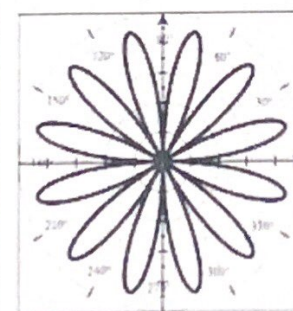
k.



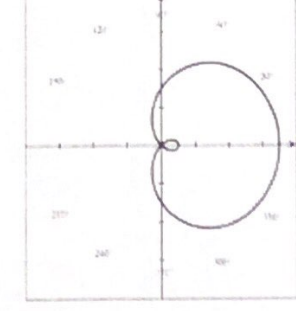
l.



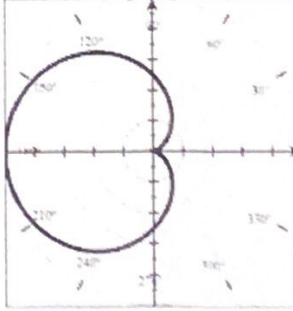
m.



n.



o.



p.